

**SANSKAR SCHOOL**

**GRADE- III**

**Assignment 28**

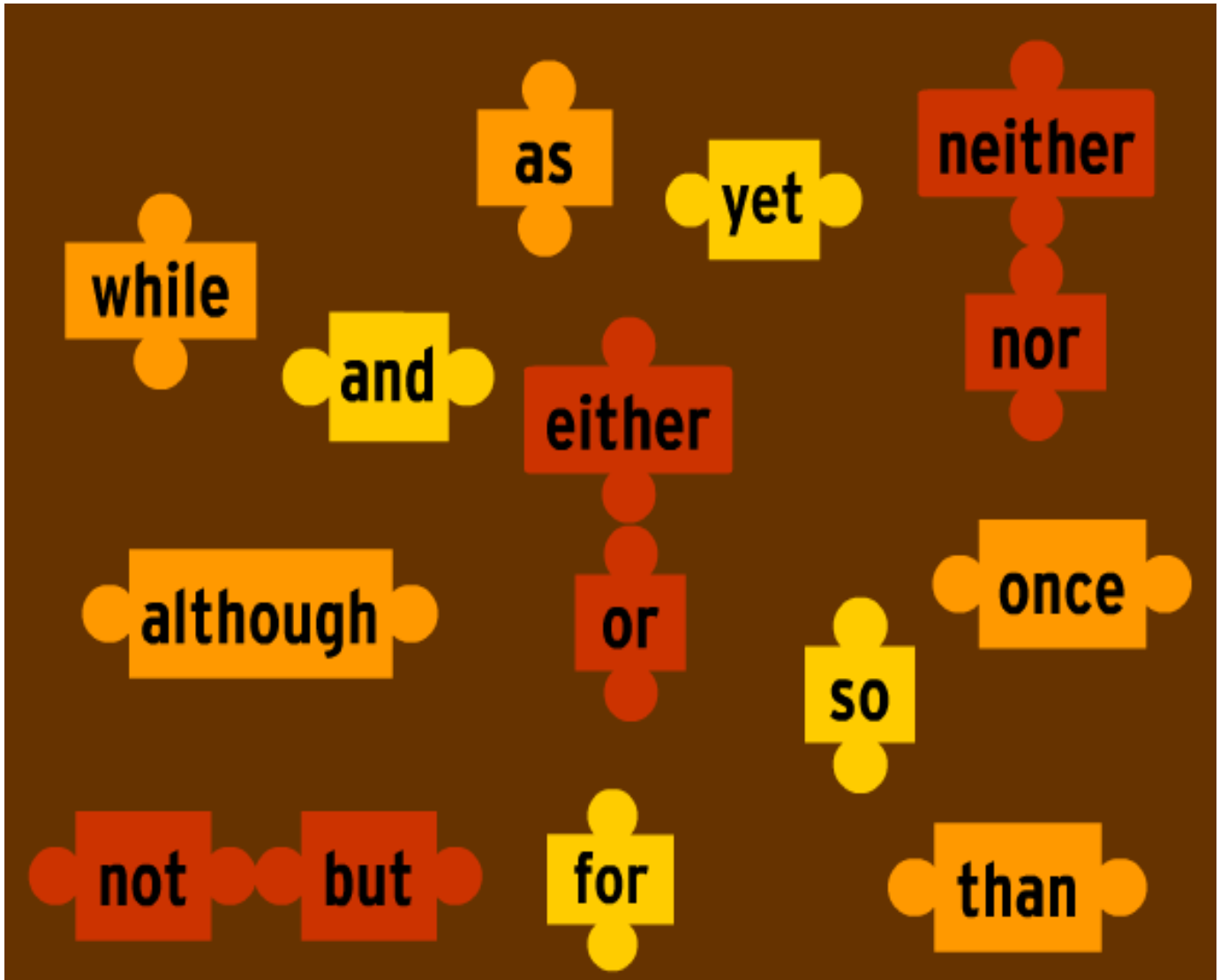
Date: Thursday, 4<sup>th</sup> February 2021

**ENGLISH:**

Watch the video carefully

<https://www.youtube.com/watch?v=QHyJC9oPnVA>

Choose any 5 conjunctions from the given picture and frame sentences.




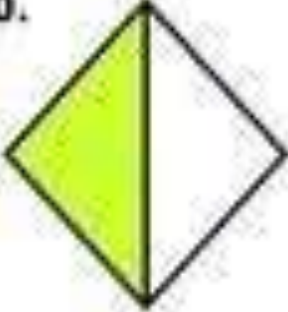
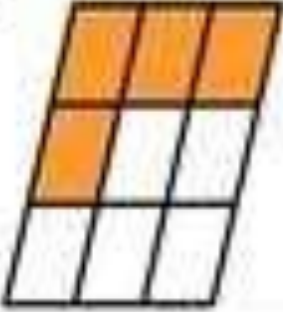


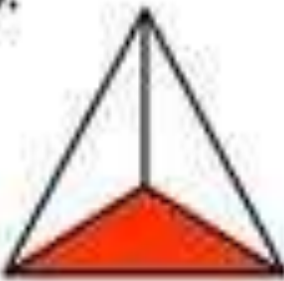


**MATHS:**

Let's Practice Fraction

**Fractions  
Numerators/Denominators**

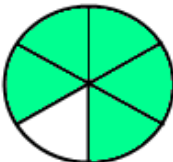
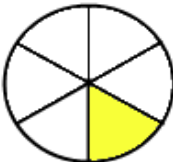

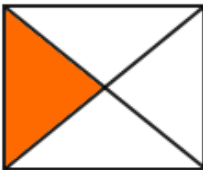
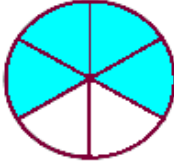




**Name:  
Date:**

Fill in the missing numerator or denominator for the shaded parts of the whole.

<p>9.</p>  <p><math>\frac{4}{\square}</math></p>	<p>10.</p>  <p><math>\frac{\square}{2}</math></p>
<p>11.</p>  <p><math>\frac{\square}{9}</math></p>	<p>12.</p>  <p><math>\frac{3}{\square}</math></p>
<p>13.</p>  <p><math>\frac{1}{\square}</math></p>	<p>14.</p>  <p><math>\frac{1}{\square}</math></p>
<p>15.</p>  <p><math>\frac{8}{\square}</math></p>	<p>16.</p>  <p><math>\frac{\square}{6}</math></p>

## Multiple Choice Fractions worksheets grade 1

*Pick the right fraction represented by the shaded part of each shape. First one is done as an example;*

1) 	$\frac{1}{2}$ $\frac{3}{6}$ $\frac{5}{6}$ $\frac{1}{6}$ $\frac{6}{5}$
2) 	$\frac{1}{4}$ $\frac{3}{4}$ $\frac{1}{6}$ $\frac{1}{3}$ $\frac{1}{5}$
3) 	$\frac{1}{2}$ $\frac{3}{8}$ $\frac{1}{6}$ $\frac{1}{7}$ $\frac{6}{8}$
4) 	$\frac{1}{3}$ $\frac{3}{6}$ $\frac{1}{2}$ $\frac{1}{5}$ $\frac{1}{4}$
5) 	$\frac{4}{6}$ $\frac{5}{6}$ $\frac{4}{5}$ $\frac{1}{6}$ $\frac{3}{5}$
6) 	$\frac{1}{3}$ $\frac{1}{4}$ $\frac{1}{2}$ $\frac{1}{5}$ $\frac{2}{1}$
7) 	$\frac{1}{2}$ $\frac{3}{4}$ $\frac{5}{6}$ $\frac{1}{4}$ $\frac{4}{3}$
8) 	$\frac{1}{6}$ $\frac{2}{3}$ $\frac{3}{3}$ $\frac{1}{3}$ $\frac{2}{5}$
9) 	$\frac{3}{5}$ $\frac{3}{4}$ $\frac{5}{4}$ $\frac{4}{6}$ $\frac{4}{5}$

## HINDI:

### काल (Tense)


<https://youtu.be/1IA8g2rCEDg>

- काल से आप क्या समझते हैं?
- काल कितने प्रकार के होते हैं? उदाहरण सहित लिखें ।

## UOI:

Look the picture carefully and choose any six animals. Write their names, classification and characteristics through any graphic of your choice.

**VTR-** Think Puzzle Explore



**ART:**

**Task:** Craft Activity

Follow the steps to make a sheep using different craft materials.

Craft book page no.16

For reference picture is given below.

**Project work**  
Follow the steps to make a sheep.

**Material required:**  
• Water colours

**1**  
Cut a small piece of bubble wrap into a flower shape.

**2**  
Take white water colour and colour the bubble wrap.

**3**  
Pullout head and legs from attached sheet. Apply glue and paste them as shown.

**4**  
Take googly eyes from

**5**  
Take ribbon from the material kit and make a bow of it. Then paste as shown.

**P.E.:**

Watch the video and learn fitness exercises.

<https://youtu.be/ov53JfTYI78>

**DANCE:**

Watch the video and practice the steps.

<https://youtu.be/MoPCDnzu4rs>